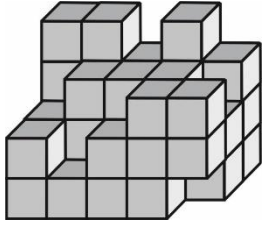


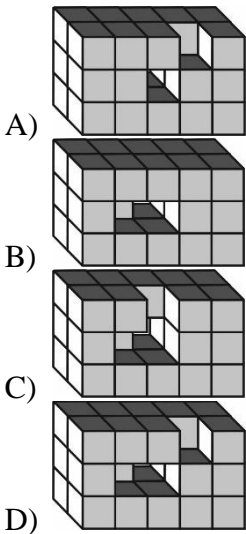
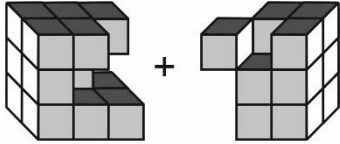
INTELLEKTUAL QÁBİLET DÁREJESI (IQ)

1. Usı figura neshe tutas kublardan quralǵan?

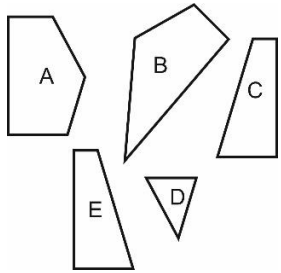


- A) 42 B) 41 C) 38 D) 40

2.

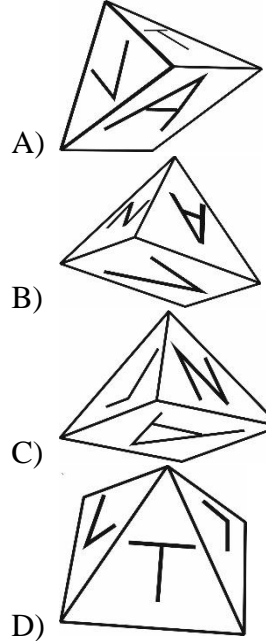
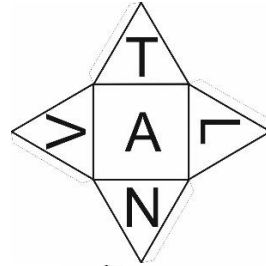


3. Tómede keltirilgen figuralardıń qaysılarınan kvadrat payda boladı?

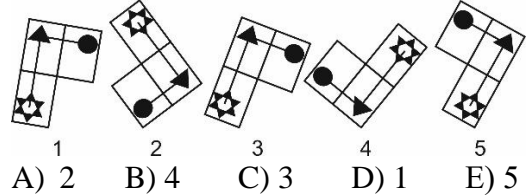


- A) BDE
B) ACD
C) ABC
D) CDE

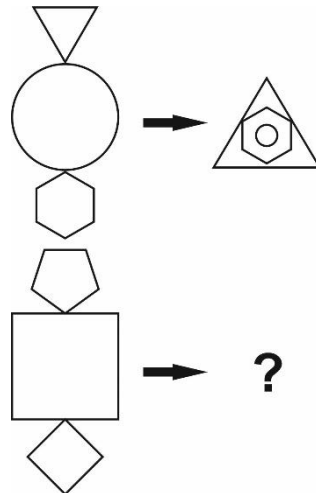
4. Tómedegi bir túrdegi figuralardan qaysı biri jayıлмаǵa tuwrı keledi?

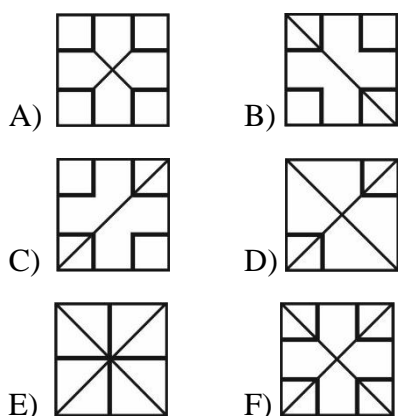
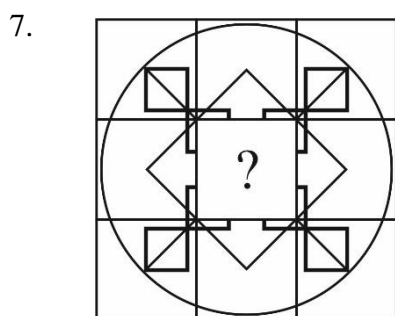
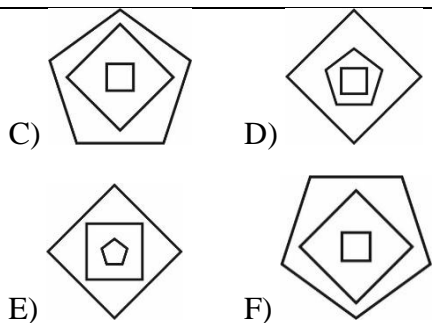


5. Tómedegilerden qaysı biri artıqsha?

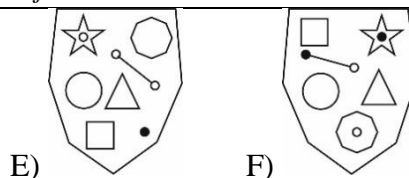
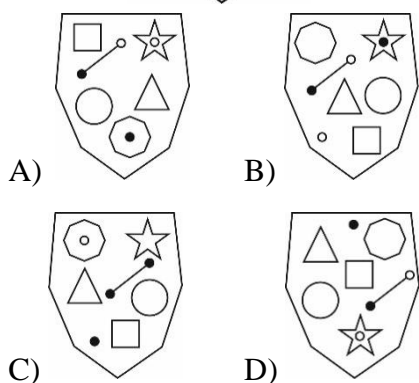
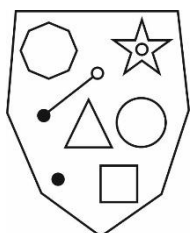


6.

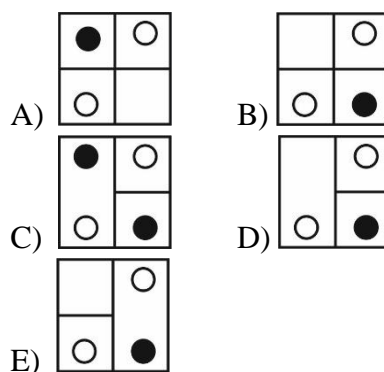
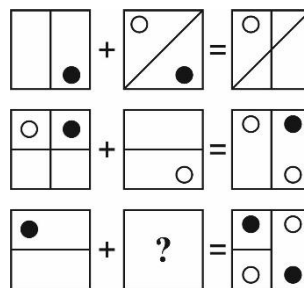




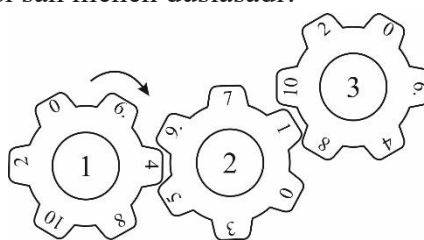
8. Tómente keltirilgen halatqa qaysı altımúyeshlik mas keledi?



9. Sórawdń órnına mas kvadrattı tabıń.



10. Tisli dóńgelekler tisleri járdeminde birikken bolsa, birinhshi dóńgelekтегі 10 sanı ekinshi dóńgelekтегі qaysı san menen, ekinshi dóńgelekтегі 9 sanı úshinshi dóńgelekтегі qaysı san menen duslasadı?

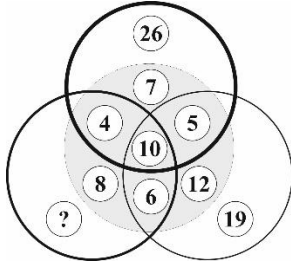


- A) 10 – 0, 3; 9 – 0, 2
- B) 10 – 3, 5; 9 – 4, 6
- C) 10 – 0, 3; 9 – 8, 4
- D) 10 – 1, 0; 9 – 6, 0

11. Tómente keltirilgen nızamlılıq tiykarında sandı tabıń.

- 2, 5, 15, 18, .?, .?, 171, 174
- A) 28, 31
 - B) 58, 61
 - C) 54, 57
 - D) 165, 168

12. Túsirilip qaldırılğan sandı tabıń.



- A) 27 B) 24 C) 17 D) 22

13. Tómente keltirilgen nızamlılıq tiykarında sandı tabıń.

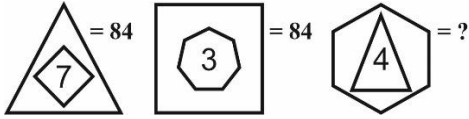
96 (16) 12;

78 (12) 13;

88 (...) 11

- A) 33 B) 8 C) 77 D) 16

14. Tómente keltirilgen nızamlılıq tiykarında sandı tabıń.



- A) 84 B) 72 C) 88 D) 68

15. Bir-birine qarsı mánisli bolmağan sózlerdi tabıń.

- A) Shadlıq-ǵam
B) Jas-ǵarrı
C) Gereń-gúnelek
D) Miyir-qáhár

16. Birinshi sózdi toltırıwshı hám aqırǵı sózdi baslawshı qawıs ishindegi sózdi tabıń.
Tabılğan sózde qaysı hárip bar?

ADAM (. . .) BEK.

- A) T B) C C) E D) D

17. Eger **BÓLINIP** sózi 1426367 ge teń bolsa, **ILINIP** nechege teń?

- A) 636267 B) 263676
C) 676362 D) 626367

18. Tómendegi anagrammada berilgen sózlerdiń qaysı biri artıqsha?

- A) ANRTI B) WQÍAT
C) ARǴAǴ D) LLEÁYK

19. Háripler hám sanlar ortasındaǵı baylanstı tabıń. Soraw belgısın qaysı san menen almasırw kerek?

T	18	G
D	10	K
P	8	K
Q	?	X
Y	3	Ch

- A) 4 B) 7 C) 16 D) 5

20. «**BESBARMAQ**» sózine baylanısı bolmağan sózdi tabıń.

- A) Gúrtik B) Qabaq
C) Asqabaq D) Sabaq