
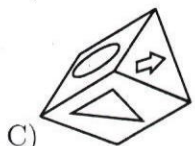
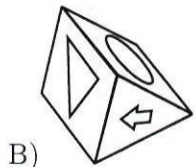
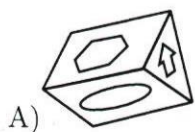
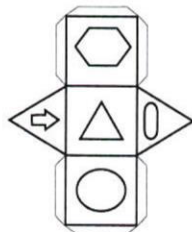


INTELLEKTUAL QOBILIYAT DARAJASI

1. Tómondegi anagrammada keltirilgen sózlerdiń qaysı biri artıqsha? SHEDABUN

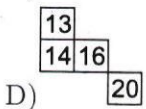
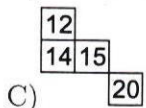
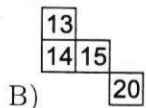
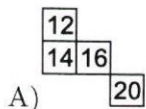
- A) *Qırǵızstan* B) *Turkiya* C) *Turkmenistan*
D) *Tajikistan*

2. Tómondegi bir turdegi figuralardan qaysı biri jayılmaǵa tuwrı keledi?

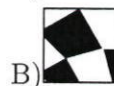



3. Túsirilip qaldırılǵan sandı tabıń.

8	9	11	14
11		14	17
13			19
14	15	17	



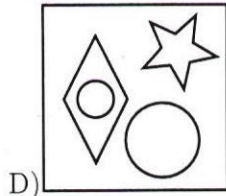
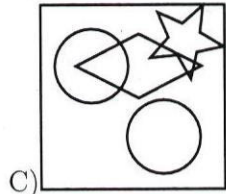
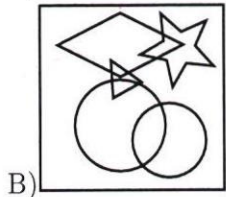

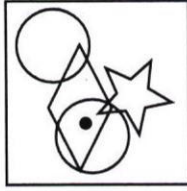
4. Mas bólegin tabıń.







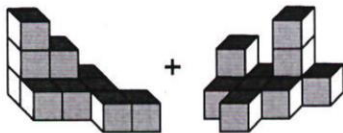
5. Tómondegilerden bir tur negizde birlespegen juaptı tabıń.

- A) *Lima* B) *Karakas* C) *Rio-de-Janeiro*
D) *Bogota*

6. Tómente keltirilgen halatǵa mas keliw ushun qaysı kvadratǵa noqat belgisin qoyıw kerek?



7.



8. “KUN” sózi “TUN” sózine ishara qılsa, “BAHAR” sózi qaysı sózge ishara qıladı?

- A) Qııs B) Pasl C) Guz D) Jaz

9. Altı dana súwret stikerler markasında tómente kórsetilgendey qaytalanadı. Úsı oramnıń 117-stikerine qanday súwret tuwrı keledi?

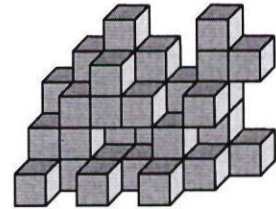


- A) +
B) ○
C) □
D) ⬠

10. Eger RESPUBLIKA sózi 5768243109 ge teń bolsa BESIK sózi neshege teń?


- A) 47610 B) 51273 C) 27513 D) 73125

11. Usı figura neshe tutas kublardan quralǵan?



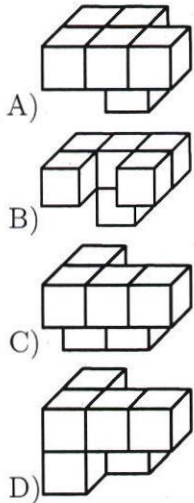

- A) 40 B) 44 C) 43 D) 41

12.



- A)
- B)
- C)
- D)

13. Dene úsh bólekten ibarat bolp, hárbir bólek altı dana kubiklerden quralǵan hám óziniń reńine iye. Súwretke qarap aq reńli bólek qanday kóriniste ekenligin anıqlań.



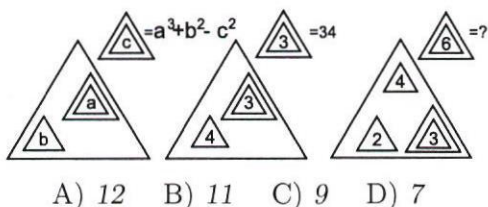
14. Sanlar qatarın dawam ettiriń
279, 93, 90, 30, 27, 9, 6, .?.
- A) 3 B) 1 C) 5 D) 2

15. "QARAQALPAQSTAN" sózine baylanıslı bolmaǵan sózdi tabıń.
- A) qataǵan B) qalqan C) parta D) aralas

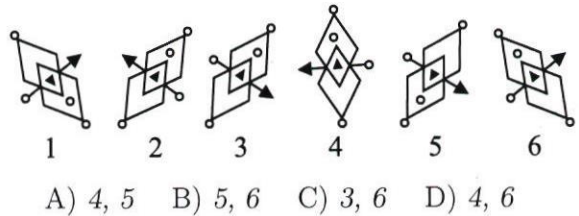
16. Birinshi sózdi toltırushi hám axırǵı sózdi baslawshı qawıs ishindeǵı sózdi tabıń. Tómendeǵı sózde qaysı hárip bar? QIRQ(...)KETKEN
- A) D B) A C) Z D) L

17. Tómende keltirilgen nızamlılıq tiykarında sandı tabıń.
- 36 (88) 44;
53 (77) 46;
21 (...) 24
- A) 44 B) 9 C) 3 D) 33

18. Tómende keltirilgen nızamlılıq tiykarında sandı tabıń.



19. Tómendegilerden qaysı biri artıqsha?



- 20.

