

## INTELLEKTUAL QOBILIYAT DARAJASI

1. "MA'NAVIYAT" so'ziga bog'liq bo'lmagan so'zni toping.

- A) Ta'm B) Tana C) Taziya D) Ta'na

2. Quyida keltirilgan qonuniyat asosida raqamni toping.

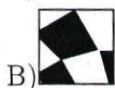

36 (88) 44;

53 (77) 46;

21 (...) 24

- A) 33 B) 3 C) 9 D) 44

3. Mos qismni toping.



4. Oltita rasm stikerlar markasida quyida ko'rsatilganidek takrorlanadi. Ushbu g'altakning 117-stikeriga qanday rasm to'g'ri keladi?




A)

B)

C)

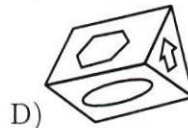
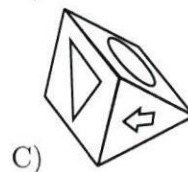
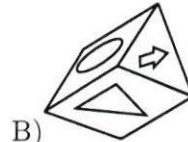

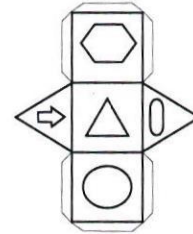
D)

5. Ushbu shakl nechta yaxlit kublardan tashkil topgan?



- A) 43 B) 41 C) 40 D) 44

6. Quyida keltirilgan bir xil shakllardan qay biri yoyilmaga to'g'ri keladi?



7. Quyidagi anagrammada keltirilgan shahar qaysi davlatda joylashganligini toping. SHEDABUN

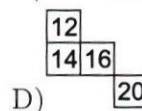
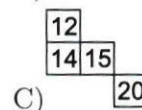
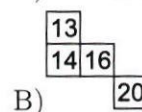
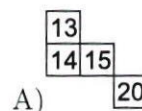
- A) Turkiya B) Tojikiston C) Qirg'iziston  
D) Turkmaniston

8. Quyidagilardan bir xil asosda birlashmagan javobni toping


- A) Oltin B) Mis C) Zumrad D) Kumush

9. Tushirib qoldirilgan raqamni toping.

8	9	11	14
11		14	17
13			19
14	15	17	



10.

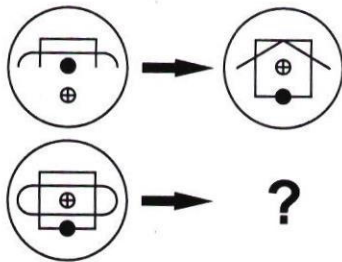


- A)
- B)
- C)
- D)

11. Birinchi so'zni to'ldiruvchi va oxirgi so'zni boshlovchi qavs ichidagi so'zni toping. Ushbu so'zda qaysi harf bor? ARK(...)LASH

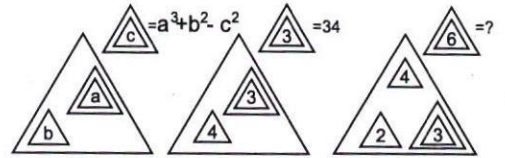
- A) K B) L C) A D) Sh

12.



- A)
- B)
- C)
- D)

13. Quyida keltirilgan qonuniyat asosida raqamni toping.

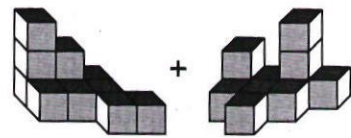


- A) 9 B) 12 C) 7 D) 11

14. "KUN" so'zi "TUN" so'ziga ishora qilsa, "BAHOR" so'zi qaysi so'zga ishora qiladi?

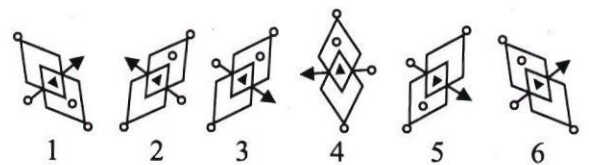
- A) Yoz B) Kuz C) Fasl D) Qish

15.



- A)
- B)
- C)
- D)

16. Quyidagilardan qay biri ortiqcha?




- A) 5, 6 B) 4, 5 C) 4, 6 D) 3, 6

17. Agar UZUNQUDUQ 818638283 ga teng bo'lsa, QUNDUZ nechiga teng?

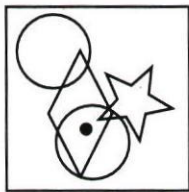
- A) 386281 B) 18638283 C) 8118638282 D) 386381

18. Jism uchta qismdan iborat bo'lib, har bir qism olti dona kubchalardan tashkil topgan va o'z rangiga ega. Rasimga qarab oq rangli qism qanday ko'rinishda ekanligini aniqlang.



- A)
- B)
- C)
- D)

19. Quyidagi keltirilgan holatga mos kelishi uchun qaysi kvadratga nuqta qo'yish kerak?



- A)
- B)
- C)
- D)

20. Sonlar qatorini davom ettiring  
279, 93, 90, 30, 27, 9, 6, .?.
- A) 1 B) 3 C) 2 D) 5